

Section 3:

Solve.

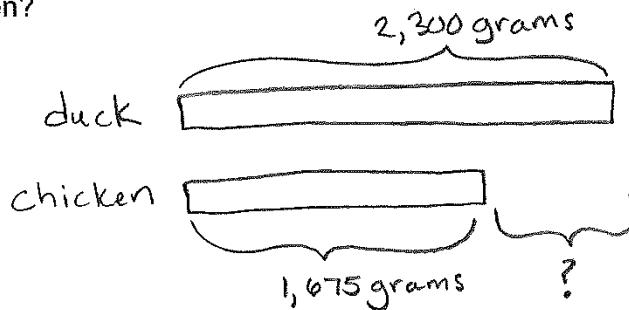
1.  $635 + 249 = \underline{884}$        $\begin{array}{r} 635 \\ + 249 \\ \hline 884 \end{array}$        $\begin{array}{r} 508 \\ + 271 \\ \hline 779 \end{array}$

2.  $508 + 271 = \underline{779}$        $\begin{array}{r} 508 \\ + 271 \\ \hline 779 \end{array}$

3. The sum of 3,684 and 2,700 is  $\underline{6,384}$ .       $\begin{array}{r} 3,684 \\ + 2,700 \\ \hline 6,384 \end{array}$

Solve. Show your work and use bar models to help.

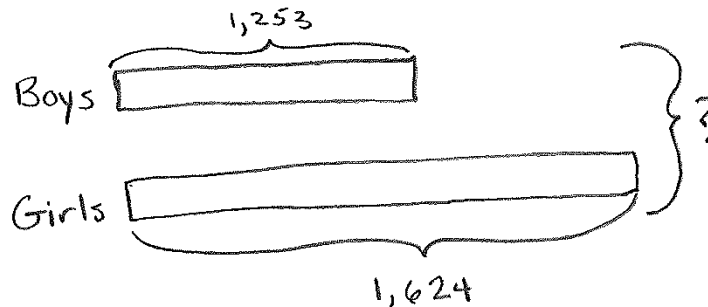
4. Mrs. Tan buys a duck and a chicken. The mass of the duck is 2,300 grams. The mass of the chicken is 1,675 grams. How much heavier is the duck than the chicken?



$$\begin{array}{r} 2,300 \\ - 1,675 \\ \hline 625 \end{array}$$

The duck is 625 grams heavier than the chicken.

5. At Hillside Elementary School, there are 1,253 boys and 1,624 girls. How many students are there at the school?



$$\begin{array}{r} 1,253 \\ + 1,624 \\ \hline 2,877 \end{array}$$

There are 2,877 students at Hillside Elementary school.

6. Complete the number pattern.

30   80   180   330   530   Pattern rule: increase by 50 more each time.

7. I am a 3-digit number that is less than 500.

My ones digit is twice the hundreds digit.

The sum of the three digits is 14.

What number am I?

284 because...  $4 \times 2 = 8$   
and,  $8 + 2 = 10 + 4 = 14$

or 356

or 428

Answer: 284; 356; 428

8.  $45 + 5 = \underline{\quad} - 100$ . The missing number is 150.

a. 30

b. 70

c. 130

d. 150

$$\begin{array}{r} 45 + 5 = 150 - 100 \\ (50) \quad (50) \end{array}$$

9. In the number 8,296 what is the value of the digit 2?

Th	H	T	O
8	2	9	6

Answer: 200

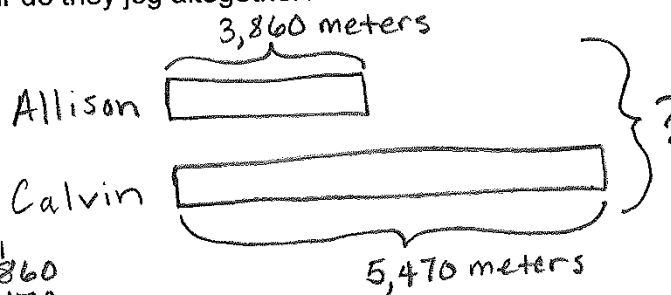
10. Subtract 989 from the sum of 1,857 and 2,465.

$\begin{array}{r} 1 \quad 1 \quad 1 \\ 1,857 \\ + 2,465 \\ \hline 4,322 \end{array}$	$\begin{array}{r} 12 \quad 11 \quad 12 \\ 34,822 \\ - 989 \\ \hline 3,333 \end{array}$
--	--

Answer: 3,333

Solve. Show your work and use bar models to help.

11. Allison jogs 3,860 meters and Calvin jogs 5,470 meters.  
How far do they jog altogether?



$$\begin{array}{r} 1 \quad 1 \\ 3,860 \\ + 5,470 \\ \hline 9,330 \end{array}$$

Allison and Calvin jog 9,330 meters altogether.

Solve. Show your work.

12. Marbles per bag:

Bag A:	Bag B:	Bag C:	Bag D:	Bag E:
1,138	2,786	1,412	4,354	5,588

Jane takes Bag B and Bag D.

Karen takes Bag E.

a. Who has more marbles?

$$\begin{array}{r} 2,786 \\ + 4,354 \\ \hline 7,140 \end{array} = \text{Jane's marbles}$$

Jane has more marbles.

$$5,588 = \text{Karen's marbles}$$

b. How many more marbles does she have?

$$\begin{array}{r} 7,140 \\ - 5,588 \\ \hline 1,552 \end{array}$$

Jane has 1,552 more marbles.

Solve.

13. Add 2,659 to 784. The sum is \_\_\_\_\_ more than 555.

b. 2,878

b. 2,888

c. 2,988

d. 3,988

$$\begin{array}{r} 2,659 \\ + 784 \\ \hline 3,443 \end{array}$$

$$\begin{array}{r} 3,443 \\ - 555 \\ \hline 2,888 \end{array}$$

14.  $\begin{array}{r} 2,573 \end{array}$

$$\begin{array}{r} + 1,989 \\ \hline 4,562 \end{array}$$

15. When you regroup 23 ones, you get 2 tens and 3 ones.

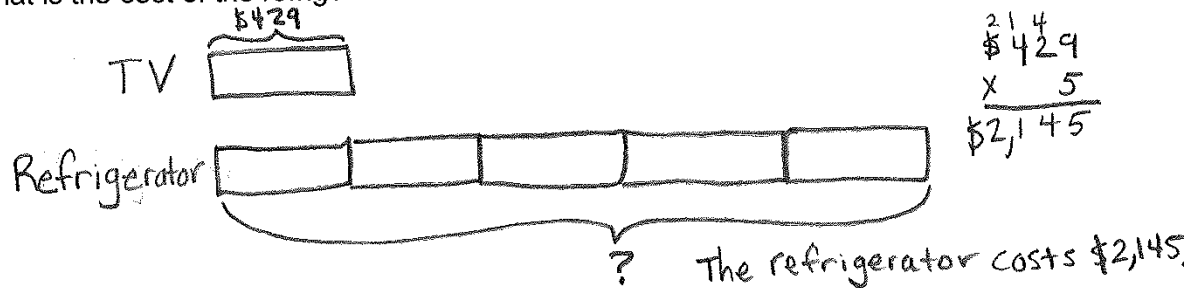
Section 4:

Multiply mentally.

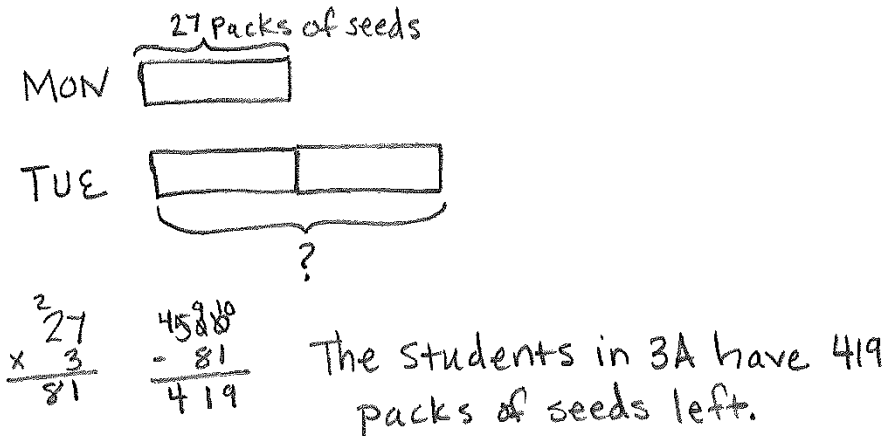
1.  $4 \times 30 = \underline{120}$  ( $4 \times 3 = 12$ )
2.  $9 \times 200 = \underline{1,800}$  ( $9 \times 2 = 18$ )
3.  $8 \times 8 = \underline{64}$
4.  $5 \times 8 = \underline{40}$
5.  $7 \times 70 = \underline{490}$  ( $7 \times 7 = 49$ )
6.  $9 \times 9 = \underline{81}$

Solve. Show your work and use bar models to help.

7. A refrigerator costs 5 times as much as a television. The television costs \$429. What is the cost of the refrigerator?



8. The students in class 3A buy 500 packets of seeds to start an eco-garden. On Monday, they use 27 packets of seeds. On Tuesday, they use twice as many packets as on Monday. How many packets of seeds do the students have left?



9. A store records the sales of its toys in the table below.

MONTH	NUMBER OF TOYS SOLD
January	180
February	90 more than in January
March	3 times as many as in February
April	320 fewer than in March

a. How many toys are sold in February?

270

$$\begin{array}{r} 180 \\ + 90 \\ \hline 270 \end{array}$$

b. How many toys are sold in March?

810

$$\begin{array}{r} 270 \\ \times 3 \\ \hline 810 \end{array}$$

c. How many toys are sold in April?

490

$$\begin{array}{r} 810 \\ - 320 \\ \hline 490 \end{array}$$

d. How many toys are sold altogether during the four months?

1,750

$$\begin{array}{r} 180 \\ 270 \\ 810 \\ + 490 \\ \hline 1,750 \end{array}$$

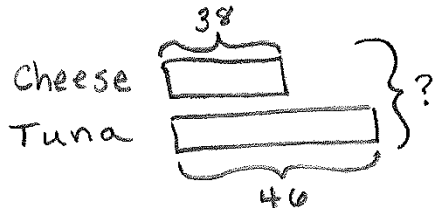
10. 
$$\begin{array}{r} 358 \\ \times 2 \\ \hline 716 \end{array}$$

11. 
$$\begin{array}{r} 31 \\ 152 \\ \times 6 \\ \hline 912 \end{array}$$

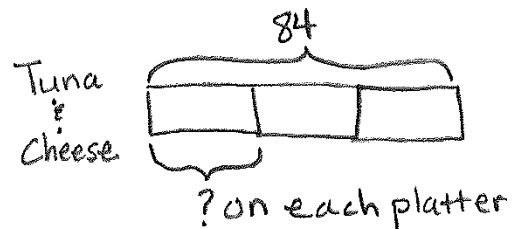
12. 
$$\begin{array}{r} 14 \\ 126 \\ \times 7 \\ \hline 882 \end{array}$$

Solve. Show your work and use bar models to help.

13. Sophia prepares 38 cheese sandwiches and 46 tuna sandwiches. She puts the sandwiches equally onto 3 platters. How many sandwiches are on each platter?



next,



$$\begin{array}{r} 38 \\ + 46 \\ \hline 84 \end{array}$$

$$\begin{array}{r} 28 \\ 3 \overline{)84} \\ \underline{-60} \\ 24 \\ \underline{-24} \\ 0 \end{array}$$

Sophia puts 28 sandwiches on each platter.

14. Maria has \$500. She buys a pair of shoes for \$108. She gives the rest of the money to her 4 nieces. Her nieces share the money equally.

a. How much money does Maria give to her 4 nieces?

Maria's Money  $\overbrace{\hspace{10em}}^{\$500}$   
 Shoes  $\underbrace{\hspace{2em}}_{\$108}$   $\underbrace{\hspace{8em}}_?$

$$\begin{array}{r} 4910 \\ \$500 \\ -108 \\ \hline \$392 \end{array}$$

Maria gives her nieces \$392.

b. How much does each niece get?

Maria's Nieces  $\overbrace{\hspace{10em}}^{\$392}$   
 Each niece gets \$98.

$$\begin{array}{r} 98 \\ 4 \overline{)392} \\ \underline{-360} \\ 32 \\ \underline{-32} \\ 0 \end{array}$$

15. In 5,786 the digit 5 has the same value as  $5 \times 1,000$ .

a.  $5 \times 1$     b.  $5 \times 10$     c.  $5 \times 100$     **d.  $5 \times 1,000$**

$$\begin{array}{r} 1,000 \\ \times 5 \\ \hline 5,000 \end{array}$$

16. What is the product of 346 and 9?

a.  $300 + 14$

b.  $3,000 + 14$

c.  $300 + 100 + 4$

**d.  $3,000 + 100 + 14$**

$$\begin{array}{r} 346 \\ \times 9 \\ \hline 3,114 \end{array}$$

$\rightarrow$  in expanded form =  $3,000 + 100 + 14$

17. Divide 87 by 6. The remainder is 3.

a. 2

**b. 3**

c. 4

d. 5

$$\begin{array}{r} 14R3 \\ 6 \overline{)87} \\ \underline{-60} \\ 27 \\ \underline{-24} \\ 3 \end{array}$$

18. Find the greatest product of a 3-digit number and a 1-digit number using each digit below only once. (3 5 6 7)

Clue: order digits from greatest to least & multiply by greatest digit.

$$\begin{array}{r} 3 \quad 2 \\ \boxed{6} \quad \boxed{5} \quad \boxed{3} \\ \times \quad \boxed{7} \\ \hline \boxed{4} \quad \boxed{5} \quad \boxed{7} \quad \boxed{1} \end{array}$$